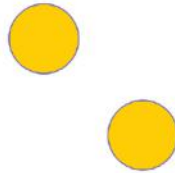
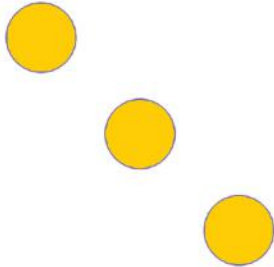



ADD AND SUBTRACT

Kindergarten-Addition & Subtraction Worksheet

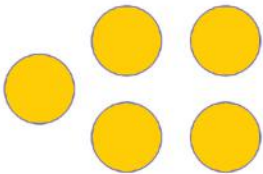
Count the Circles and find the sum or difference.



$$\underline{\quad} + \underline{\quad} = \underline{\quad}$$





$$\underline{\quad} - \underline{\quad} = \underline{\quad}$$



$$\underline{\quad} + \underline{\quad} = \underline{\quad}$$



$$\underline{\quad} - \underline{\quad} = \underline{\quad}$$



$$\underline{\quad} + \underline{\quad} = \underline{\quad}$$