







# ADDING WITH PICTURES



## Kindergarten Addition Worksheet



Count the Vertical Lines and write the answer.




$$\boxed{6} + \boxed{4} = \boxed{\phantom{00}}$$


$$\boxed{2} + \boxed{5} = \boxed{\phantom{00}}$$


$$\boxed{7} + \boxed{3} = \boxed{\phantom{00}}$$


$$\boxed{4} + \boxed{5} = \boxed{\phantom{00}}$$


$$\boxed{3} + \boxed{3} = \boxed{\phantom{00}}$$


$$\boxed{1} + \boxed{6} = \boxed{\phantom{00}}$$