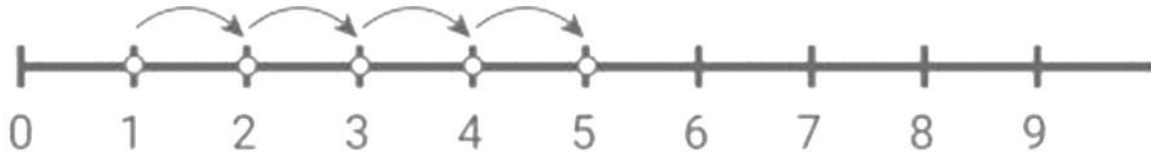


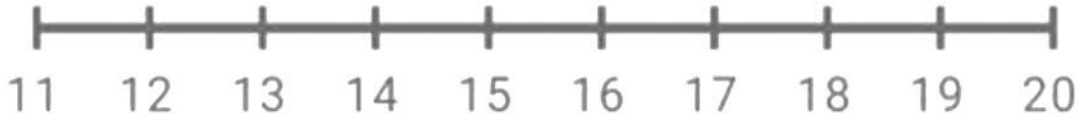
# ADDING WITH NUMBER LINES

## Kindergarten Addition Worksheet

Draw the addition hops. Write the missing Numbers.



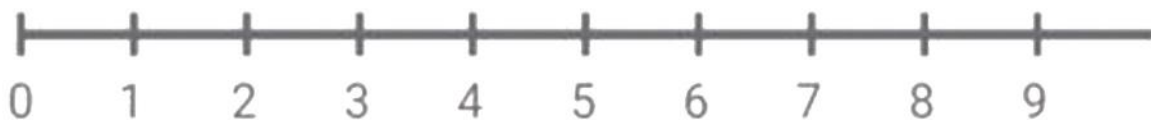
$$1 + 4 = \boxed{5}$$



$$13 + 6 = \boxed{\phantom{00}}$$



$$7 + 5 = \boxed{\phantom{00}}$$



$$5 + 4 = \boxed{\phantom{00}}$$