




SUBTRACTING BALLS


Kindergarten Subtraction Worksheet


Subtract the equation and write how many are left.


1. 6 
 $- 4$


2. 3 
 $- 0$


3. 9 
 $- 2$

4. 5 
 $- 2$

5. 6 
 $- 4$

6. 2 
 $- 1$

7. 8 
 $- 7$

8. 4 
 $- 2$
