



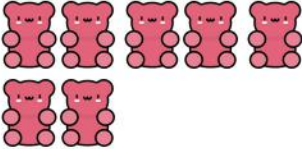
SUBTRACTING GUMMIES


Kindergarten Subtraction Worksheet

Subtract the equation and write how many are left.


1.
$$\begin{array}{r} 8 \\ - 4 \\ \hline \end{array}$$



2.
$$\begin{array}{r} 4 \\ - 3 \\ \hline \end{array}$$


3.
$$\begin{array}{r} 7 \\ - 5 \\ \hline \end{array}$$


4.
$$\begin{array}{r} 5 \\ - 1 \\ \hline \end{array}$$


5.
$$\begin{array}{r} 4 \\ - 1 \\ \hline \end{array}$$


6.
$$\begin{array}{r} 6 \\ - 6 \\ \hline \end{array}$$


7.
$$\begin{array}{r} 8 \\ - 5 \\ \hline \end{array}$$


8.
$$\begin{array}{r} 2 \\ - 0 \\ \hline \end{array}$$
