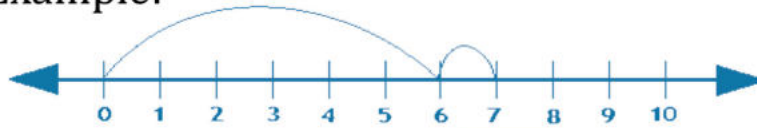


Subtracting using number lines

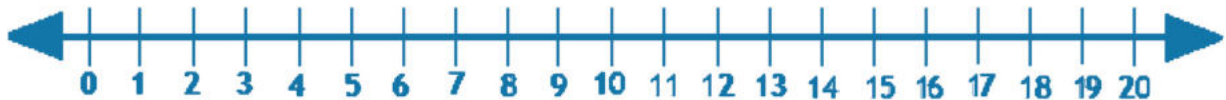
Grade 1 Math Worksheet

Subtract by drawing hops on the number line.

Example:



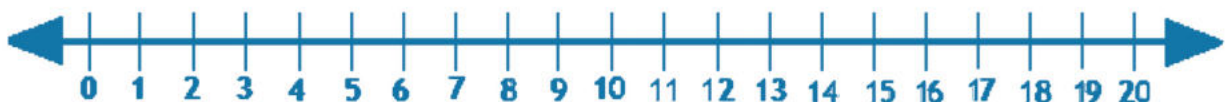
$$6 + 1 = \boxed{7}$$



$$12 + 2 = \boxed{}$$



$$9 + 7 = \boxed{}$$



$$8 + 5 = \boxed{}$$