

# Addition sentences

## Grade 1 Math Worksheet

Find the missing number. Color in circles to help.


$1 + \underline{\quad} = 4$




$2 + \underline{\quad} = 5$



$6 + \underline{\quad} = 9$




$4 + \underline{\quad} = 6$




$1 + \underline{\quad} = 5$



$3 + \underline{\quad} = 7$



$5 + \underline{\quad} = 8$



$2 + \underline{\quad} = 6$

