


# Addition sentences


## Grade 1 Math Worksheet

Find the missing number. Color in circles to help.


$3 + \underline{\quad} = 8$



$5 + \underline{\quad} = 8$



$2 + \underline{\quad} = 7$




$3 + \underline{\quad} = 4$




$0 + \underline{\quad} = 5$



$1 + \underline{\quad} = 6$



$2 + \underline{\quad} = 9$



$4 + \underline{\quad} = 6$

