


Addition sentences


Grade 1 Math Worksheet

Find the missing number. Color in circles to help.


$4 + \underline{\quad} = 6$




$7 + \underline{\quad} = 8$




$5 + \underline{\quad} = 9$




$2 + \underline{\quad} = 5$




$3 + \underline{\quad} = 4$



$3 + \underline{\quad} = 8$



$1 + \underline{\quad} = 7$



$1 + \underline{\quad} = 7$

