

Counting objects (numbers 1-10)

Grade 1 Math Worksheet

Circle the correct number of objects.


Circle 8 Base balls.




Circle 5 Shuttlecocks.




Circle 4 Apples.



Circle 6 Mangoes.



Circle 1 Dice.



Circle 2 Tomatoes.

