


Counting objects (up to 20)

Grade 1 Math Worksheet

Count the objects and write the total.


1)  = _____


2)  = _____

3)  = _____

4)  = _____

5)  = _____

6)  = _____

7)  = _____

8)  = _____