



# Counting objects (up to 30)


## Grade 1 Math Worksheet


Count the objects and write the total.

1)  = \_\_\_\_\_

2)  = \_\_\_\_\_


3)  = \_\_\_\_\_

4)  = \_\_\_\_\_

5)  = \_\_\_\_\_

6)  = \_\_\_\_\_

7)  = \_\_\_\_\_

8)  = \_\_\_\_\_