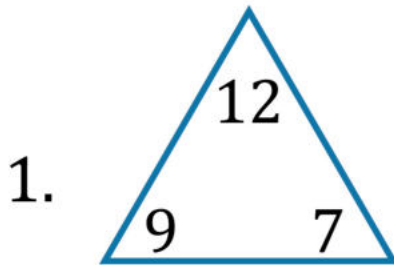


Fact families

Grade 1 Math Worksheet

Complete each family of facts

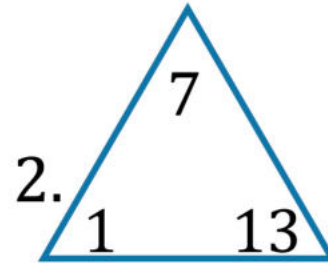


$$\square - \square = \square$$

$$\square + \square = \square$$

$$\square - \square = \square$$

$$\square + \square = \square$$

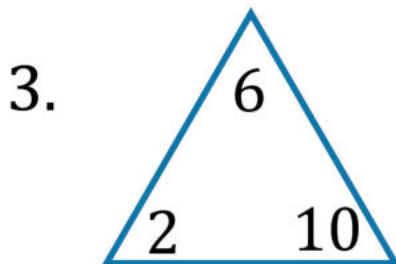


$$\square - \square = \square$$

$$\square + \square = \square$$

$$\square - \square = \square$$

$$\square + \square = \square$$

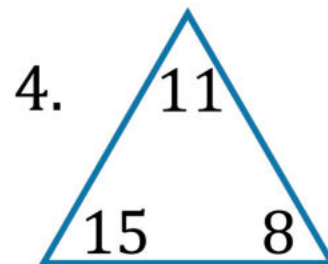


$$\square - \square = \square$$

$$\square + \square = \square$$

$$\square - \square = \square$$

$$\square + \square = \square$$



$$\square - \square = \square$$

$$\square + \square = \square$$

$$\square - \square = \square$$

$$\square + \square = \square$$