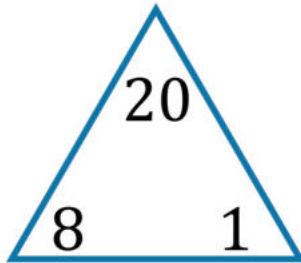


Fact families

Grade 1 Math Worksheet

Complete each family of facts

1.



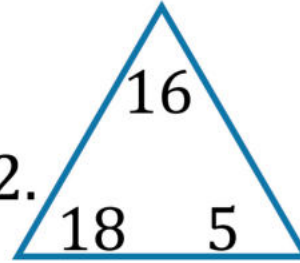
$$\square - \square = \square$$

$$\square + \square = \square$$

$$\square - \square = \square$$

$$\square + \square = \square$$

2.



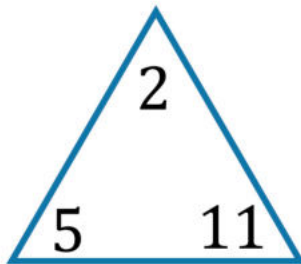
$$\square - \square = \square$$

$$\square + \square = \square$$

$$\square - \square = \square$$

$$\square + \square = \square$$

3.



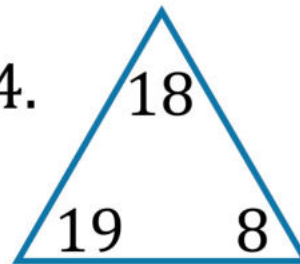
$$\square - \square = \square$$

$$\square + \square = \square$$

$$\square - \square = \square$$

$$\square + \square = \square$$

4.



$$\square - \square = \square$$

$$\square + \square = \square$$

$$\square - \square = \square$$

$$\square + \square = \square$$