

Identifying “halves” and “quarters”


Grade 1 Math Worksheet

Is the shape split into halves or quarters?


Circle the correct answer.




Halves / Quarters



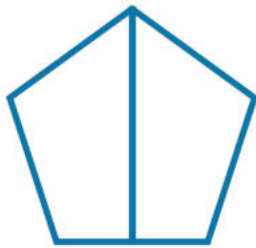
Halves / Quarters



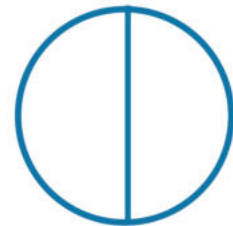
Halves / Quarters




Halves / Quarters




Halves / Quarters



Halves / Quarters



Halves / Quarters



Halves / Quarters