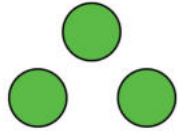


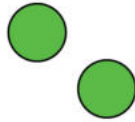
# Adding with objects

## Grade 1 Math Worksheet

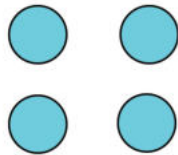
Count / draw circles, read / write numbers and find the sums.



+



$$\underline{\quad} + \underline{\quad} = \underline{\quad}$$



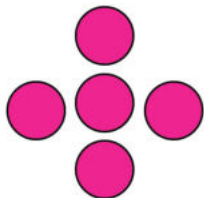
+



$$\underline{\quad} + \underline{\quad} = \underline{\quad}$$

+

$$4 + 2 = \underline{\quad}$$



+



$$\underline{\quad} + \underline{\quad} = \underline{\quad}$$

+

$$3 + 5 = \underline{\quad}$$

+

$$1 + 6 = \underline{\quad}$$