


Comparing lengths using inches

Grade 1 Math Worksheet

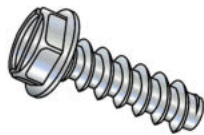
Measure the following objects and circle the longer object.



Length: _____ inches




Length: _____ inches




Length: _____ inches



Length: _____ inches



Length: _____ inches



Length: _____ inches