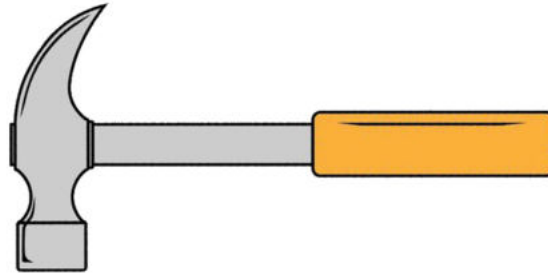



# Order the heights of 3 objects

## Grade 1 Math Worksheet

Use a Scale  to measure each picture below.




Length: \_\_\_\_\_ Inches



Width: \_\_\_\_\_ Inches

Length: \_\_\_\_\_ Inches

Find the longest and shortest spoons around your house and measure them with a penny.



Length of the longest spoon:  
\_\_\_\_\_ Inches

Length of the shortest spoon:  
\_\_\_\_\_ Inches