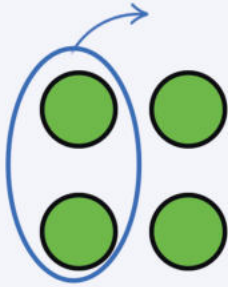


Subtraction sentences

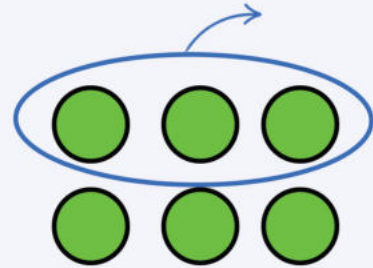
Grade 1 Math Worksheet

Some balls are being taken away. Circle the equation that describes how many balls will be left. Write the answer.



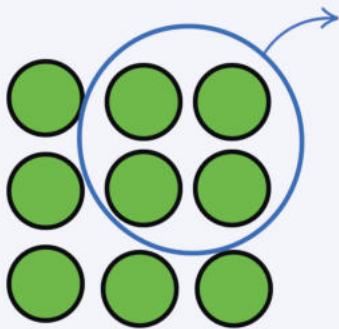
$4 - 1 = \underline{\quad}$ $4 - 2 = \underline{\quad}$

$2 - 1 = \underline{\quad}$ $6 - 4 = \underline{\quad}$



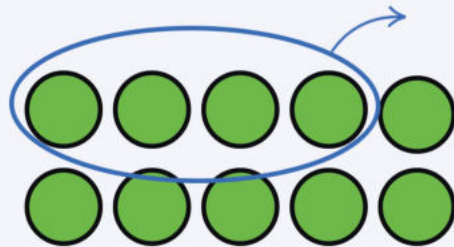
$6 - 3 = \underline{\quad}$ $6 - 2 = \underline{\quad}$

$6 - 1 = \underline{\quad}$ $9 - 3 = \underline{\quad}$



$9 - 3 = \underline{\quad}$ $9 - 4 = \underline{\quad}$

$8 - 4 = \underline{\quad}$ $6 - 4 = \underline{\quad}$



$8 - 4 = \underline{\quad}$ $6 - 2 = \underline{\quad}$

$10 - 4 = \underline{\quad}$ $8 - 2 = \underline{\quad}$