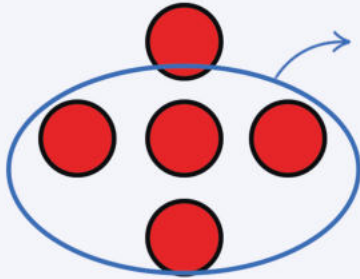


Subtraction sentences

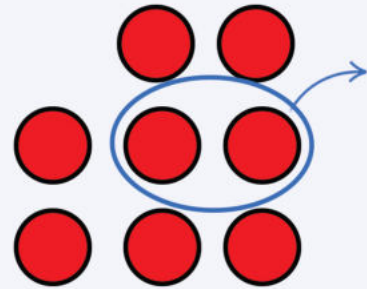
Grade 1 Math Worksheet

Some balls are being taken away. Circle the equation that describes how many balls will be left. Write the answer.



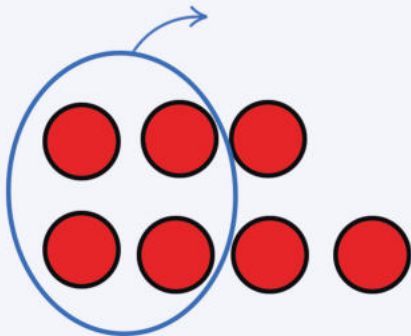
$5 - 4 = \underline{\quad}$ $4 - 3 = \underline{\quad}$

$3 - 2 = \underline{\quad}$ $6 - 5 = \underline{\quad}$



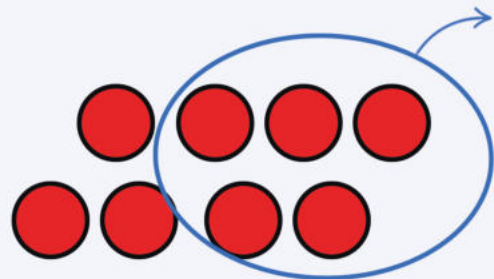
$8 - 6 = \underline{\quad}$ $6 - 2 = \underline{\quad}$

$8 - 2 = \underline{\quad}$ $6 - 4 = \underline{\quad}$



$7 - 4 = \underline{\quad}$ $8 - 3 = \underline{\quad}$

$8 - 4 = \underline{\quad}$ $7 - 3 = \underline{\quad}$



$7 - 4 = \underline{\quad}$ $6 - 5 = \underline{\quad}$

$5 - 3 = \underline{\quad}$ $8 - 5 = \underline{\quad}$