


Subtraction sentences


Grade 1 Math Worksheet

There are 9 balls. Circle the equation that describes how many balls are blue. Write the answer.




$5 - 4 = \underline{\quad}$ $4 + 5 = \underline{\quad}$

$9 - 5 = \underline{\quad}$ $5 - 9 = \underline{\quad}$




$9 - 3 = \underline{\quad}$ $9 - 2 = \underline{\quad}$

$6 - 3 = \underline{\quad}$ $9 - 4 = \underline{\quad}$




$7 - 2 = \underline{\quad}$ $9 - 2 = \underline{\quad}$

$9 - 2 = \underline{\quad}$ $7 + 2 = \underline{\quad}$




$8 - 3 = \underline{\quad}$ $8 - 6 = \underline{\quad}$

$9 - 6 = \underline{\quad}$ $9 - 3 = \underline{\quad}$



$9 - 2 = \underline{\quad}$ $9 - 7 = \underline{\quad}$

$8 - 7 = \underline{\quad}$ $8 - 4 = \underline{\quad}$



$8 + 4 = \underline{\quad}$ $9 - 7 = \underline{\quad}$

$9 - 4 = \underline{\quad}$ $8 - 7 = \underline{\quad}$