


Subtraction sentences

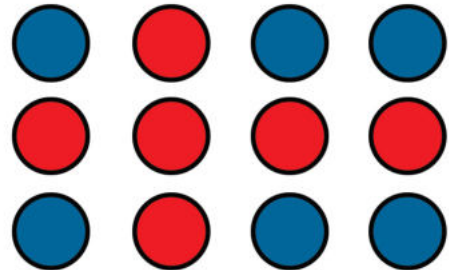
Grade 1 Math Worksheet

There are 12 balls. Circle the equation that describes how many balls are blue. Write the answer




$12 - 2 = \underline{\quad}$ $12 - 3 = \underline{\quad}$

$12 - 3 = \underline{\quad}$ $12 + 3 = \underline{\quad}$




$7 + 5 = \underline{\quad}$ $12 - 7 = \underline{\quad}$

$12 - 7 = \underline{\quad}$ $12 - 5 = \underline{\quad}$




$6 + 3 = \underline{\quad}$ $12 + 6 = \underline{\quad}$

$12 - 6 = \underline{\quad}$ $9 - 3 = \underline{\quad}$




$7 - 5 = \underline{\quad}$ $8 - 6 = \underline{\quad}$

$7 + 3 = \underline{\quad}$ $9 - 3 = \underline{\quad}$



$10 + 2 = \underline{\quad}$ $2 + 8 = \underline{\quad}$

$12 - 2 = \underline{\quad}$ $12 + 4 = \underline{\quad}$



$8 + 4 = \underline{\quad}$ $12 - 4 = \underline{\quad}$

$8 - 4 = \underline{\quad}$ $12 - 8 = \underline{\quad}$