


Vertical addition

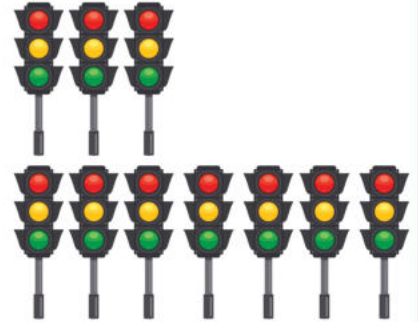
Grade 1 Math Worksheet

How many traffic lights are there?

$$\begin{array}{r} 1 \\ + 6 \\ \hline \\ \hline \end{array}$$




$$\begin{array}{r} 3 \\ + 7 \\ \hline \\ \hline \end{array}$$



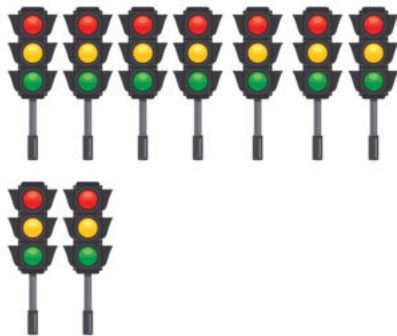
$$\begin{array}{r} 1 \\ + 8 \\ \hline \\ \hline \end{array}$$



$$\begin{array}{r} 4 \\ + 6 \\ \hline \\ \hline \end{array}$$



$$\begin{array}{r} 7 \\ + 2 \\ \hline \\ \hline \end{array}$$



$$\begin{array}{r} 2 \\ + 4 \\ \hline \\ \hline \end{array}$$



$$\begin{array}{r} 5 \\ + 0 \\ \hline \\ \hline \end{array}$$



$$\begin{array}{r} 6 \\ + 2 \\ \hline \\ \hline \end{array}$$

